



THE ASIAN SCHOOL, DEHRADUN

Dear Parents

Greetings!

It has always been a moment of pride for us to witness the progressive growth of our dear students. Considering learning as an incessant process, it is recommended that our young minds shall engage themselves in solving the worksheets as a part of their winter holiday homework.

Our aim is to provide homework that will consolidate what the students have learned during the term and also allow them to explore new ideas and become independent learners. This homework will therefore be a valuable tool for your child's growth and development.

The homework will be explained to your child by their teachers and outlined in a document that they have been provided. Should you have any questions or concerns regarding the homework, please do not hesitate to speak to your child's teacher.

Besides the holiday home work, our students must also engage themselves in reading, singing, strengthen the family bond, adopt a healthy life style, respect the elders and inspire the younger ones, admire and appreciate nature, think and create something out of the box, spend time with the grandparents and follow necessary precautions to stay safe.

We hope that our endowed students will nurture their aptitude in the vacation and embrace the **NEW YEAR 2024** with bliss.

Thank you for your continued support in your child's education. We wish you all a safe and happy winter holiday.

Thanks & Regards

Raachi Mehrotra
HEADMISTRESS

Luchi P. Datta
PRINCIPAL





THE ASIAN SCHOOL, DEHRADUN
FINAL EXAMINATION SYLLABUS
CLASS- II (2023-24)

| Subject | Syllabus | |
|---------|------------------------------------|--|
| English | <u>LITERATURE:</u> | |
| | *CH-Storm in the Garden | *Poem-Granny Granny please come |
| English | *CH-The grasshopper & the ant | *CH-Curly locks & the three bears |
| | <u>LANGUAGE:</u> | |
| English | *Conjunction | *Preposition |
| | *Comparison (Adjective) | *Contractions |
| English | *Verbs | *Singular/Plural |
| | *Comprehension | *Picture Composition |
| Hindi | <u>साहित्य भाग</u> | |
| | पाठ - एककी दोक्की | पाठ - नटखट चूहा |
| Hindi | कविता - सूरज जल्दी आना | पाठ- भालू ने खेली फुटबॉल |
| | <u>भाषा भाग</u> | |
| Hindi | संज्ञा | सर्वनाम |
| | विलोम शब्द | क्रिया |
| Hindi | विशेषण | वर्ष, त्योहार |
| | गिनती ४१ से ५० | अपठित गद्यांश |
| Math | चित्र लेखन | |
| | Ch- 3 Even and Odd Numbers | Ch- 4 Addition |
| Math | Ch- 5 Subtraction | Ch- 6 Multiplication |
| | Ch- 8 Division | Ch- 10 Money |
| Math | Ch- 12 Geometry | Ch- 13 Patterns |
| | *Forward Counting 501 to 1000 | * Backward Counting 1000 to 501 |
| Math | * Tables 2 to 10 | * Mental Math related to the above topics. |
| EVS | Ch-13 Clean Surroundings | |
| | Ch-14 Being Fit and Healthy | |
| EVS | Ch-16 Plants are useful | |
| | Ch-17 The Animal World | |
| EVS | Ch-20 Up in the Sky | |
| | Ch-5 Input ,Output and Storage | Ch-6 Fun with Paint |
| IT | Ch-7 Coding in Scratch Junior | |
| | | |
| GK | 1-Tourist destination (page no 10) | 2- People of India (page no12,13) |
| | 3-Homes of People (page no 20) | 4- Useful animals (page no23) |
| GK | 5-Science Quiz (page no35) | 6- Number Game (page no40) |
| | 7-Indian Dance Moves (page no44) | 8- Word Search (page no56) |



THE ASIAN SCHOOL, DEHRADUN

(Session 2023-24)

HOLIDAY HOMEWORK WORKSHEET

Name-.....

Class: II

Subject: ENGLISH

Note:

1. Attempt the worksheet given below.
2. The worksheet is based on the topics which have been taught previously.
3. The worksheet is meant for practice and recapitulation and shall be discussed by the subject teacher once the classes resume.

1.Read the passage and answer the questions below.

Tigers are easy to recognize. They have orange fur with black stripes and very sharp teeth. Tigers have a muscular body. Their muscular bodies help them to run very fast. Tigers eat flesh of other animals so they are called Carnivores. They love to swim and bathe in rivers and lakes. India has the most tigers in the world.

1.Which country has the most tigers?

Ans- _____

2.Why are tigers able to run very fast?

Ans- _____

3.What two things tigers like to do?

Ans- _____

4.Find and write any two action words from the above passage.

Ans- _____


2.Look at Tina's Calendar.

| |
|---|
| Monday-Tina goes to school. |
| Tuesday-Tina plays football in the evening. |
| Wednesday-She goes for a swim in the afternoon. |
| Thursday-She reads a book in the library. |
| Friday-Helps her mother with the shopping. |
| Saturday-Watches T.V with her friends. |
| Sunday-Gets up late in the morning. |

Fill in the blanks in the paragraph below to complete it.

Tina has a busy week. On Monday she goes to Sunday is the only day when she is not busy and gets up The day when she helps her mother with is Friday. On she plays football in the and she watches with her friends on The day she goes to the to read books is

3. Find and write at least two small words hidden inside each word given below.

1.  _____

2  _____

4. Fill in the blanks with suitable words from the pairs given within the brackets.

1. Do you him? (no/know)
2. I can't you. (sea/see)
3. They lost Pet. (there/their)

5. Complete the table.

| | |
|-----------|--------|
| 1. foot | |
| 2. | Boxes |
| 3. Goose | |
| 4. | Calves |
| 5. Tomato | |
| 6. | Puppy |
| 7. Hair | |
| 8. | woman |

6. Write two adjectives for each of the following.

1. My teacher-
2. My school-

7. Fill in the blanks with is, am or are.

1. A rose a beautiful flower.
2. These tall plants.
3. The students in the playground.
4. My grandmother unwell.
5. I ... not ready for the breakfast.

8. Write in your own words.

- a. If a fairy grants me two wishes. What will they be?



THE ASIAN SCHOOL, DEHRADUN

(Session 2023-24)

HOLIDAY HOMEWORK WORKSHEET

Name-.....

Class: II

Subject: HINDI

Note:

1. Attempt the worksheet given below.
2. The worksheet is based on the topics which have been taught previously.
3. The worksheet is meant for practice and recapitulation and shall be discussed by the subject teacher once the classes resume.

प्रश्न 1) नीचे दिए गए अपठित गद्यांश को पढ़कर प्रश्नों के उत्तर दीजिए।

मेरे घर के आगे एक बगीचा है। उसमें कई रंग-बिरंगे तरह-तरह के फूलों के पौधे लगे हैं। वहाँ गुलाब, गेंदा, मोगरा आदि के पौधे लगे हुए हैं। सरदी का मौसम आते ही उनमें सुंदर-सुंदर रंग-बिरंगे फूल लगते हैं।

हम हमेशा कुरसी लगाकर लॉन में बैठते हैं। बगीचे में बहुत से पक्षी भी आते हैं। फूलों पर तितलियाँ मँडराती रहती हैं। मेरे पिताजी को बागवानी का बहुत शौक है। वे छुट्टी के दिन पौधों की देखभाल करते हैं। हम सब भी उनकी मदद करते हैं। हमें पौधों को देखना बहुत पसंद है।

प्रश्न क) घर के आगे क्या है ?

प्रश्न ख) बगीचे में कौन-कौन से पौधे हैं?

प्रश्न ग) फूलों पर कौन मँडराती है ?

प्रश्न 2) चित्र देखकर पाँच वाक्य लिखिए-





THE ASIAN SCHOOL, DEHRADUN

(Session 2023-24)

HOLIDAY HOMEWORK WORKSHEET

Name-.....

Class: II

Subject: HINDI

Note:

1. Attempt the worksheet given below.
2. The worksheet is based on the topics which have been taught previously.
3. The worksheet is meant for practice and recapitulation and shall be discussed by the subject teacher once the classes resume.

प्रश्न 1) सही संज्ञा शब्द पर निशान लगाइए-

- क) आसमान में [पक्षी / जानवर] उड़ रहे हैं।
ख) [कौआ / कोयल] की आवाज़ सुरीली होती है।
ग) सीमा [गुड़िया / किताब] से खेल रही है।
घ) मुझे [पहाड़ / सड़क] पर चढ़ना पसंद है।
ङ) [फौजी/ माली] देश की रक्षा करते हैं।

प्रश्न 2) सही सर्वनाम शब्द चुनकर लिखिए-

- क) _____ फुटबॉल का खेल है। [यह/हम]
ख) राम _____ भाई है। [तुम/उसका]
ग) _____ बाज़ार जा रही है। [उसकी/ वह]।
घ) सुमन _____ बहन है। [उसकी/ वह]
ङ) _____ पास बहुत खेलौने हैं। [तुम/ मेरे]

प्रश्न 3) निम्नलिखित शब्दों के बहुवचन बनाओ।

क) किताब-





ख) चीटीं-





ग) पतंग-





घ) चूहा-





ड) लड़की-





च) तोता-





प्रश्न 4) रेखांकित शब्दों के लिंग बदलकर खाली स्थान भरिए-

क) मोर छत पर बैठा है।



_____ छत पर बैठी है।

ख) गाय दूध देती है।



_____ गाड़ी खींचता है।

ग) लड़का पुस्तक पढ़ता है।



_____ पुस्तक पढ़ती है।



प्रश्न 5) दिए गए शब्दों के पर्यायवाची शब्द लिखें-

क) कमल- _____

ख) घर- _____

ग) पहाड़- _____

प्रश्न 6) अंको को शब्दों में लिखें-

२६- _____

३४- _____

२१- _____

२७- _____

४०- _____

प्रश्न 7) दिए गए चित्रों को क्रिया शब्दों से मिलान कीजिए।



सोना



चैयना



लिखना



नाचना



दौड़ना

खाना



THE ASIAN SCHOOL, DEHRADUN

(Session 2023-24)

HOLIDAY HOMEWORK WORKSHEET

Name-.....

Class: II

Subject: MATH

Note:

1. Attempt the worksheet given below.
2. The worksheet is based on the topics which have been taught previously.
3. The worksheet is meant for practice and recapitulation and shall be discussed by the subject teacher once the classes resume.

MENTAL MATH

1. $10 \times 10 =$ _____
2. 876, 877, _____, _____, _____
3. $569 + 000 =$ _____
4. Even number + Even number = _____
5. Division means repeated _____.
6. The ordinal numbers are called _____ numbers.
7. _____ and _____ are the weekend days.
8. The answer of the subtracted numbers is called the _____.
9. The year with 366 days is called the _____ year.
10. The numbers that make the exact pairs are called the _____ numbers.
11. The repeated addition of the numbers is called _____.
12. Comparing the two numbers means finding out whether one number is greater or _____ than the other number.
13. _____ order means arranging the numbers from the biggest to the smallest.
14. Currency means the system of _____ used in a country.
15. The Indian Currency is _____.
16. We cannot subtract a bigger number from a _____ number.

17. The number before and after an odd number is an _____ number.

18. When a number is divided by 1, the answer is the _____ itself.

19. A period of 1000 years is called a _____.

20. $7 + 7 + 7 + 7 + 7 + 7 = 7 \times 6$ True or False _____.



THE ASIAN SCHOOL, DEHRADUN

(Session 2023-24)

HOLIDAY HOMEWORK WORKSHEET

Name-.....

Class: II

Subject: MATHEMATICS

Note:

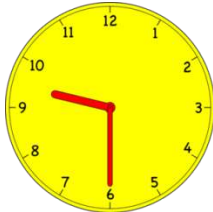
1. Attempt the worksheet given below.
2. The worksheet is based on the topics which have been taught previously.
3. The worksheet is meant for practice and recapitulation and shall be discussed by the subject teacher once the classes resume.

Q1. Addition and Subtraction.

a. $545 + 228 =$ _____

b. $256 + 265 =$ _____

Q2. See the clock and tell the time.



Q3. Write the next three even numbers for the following. 58, 60, _____

Q4. Dodging.

a. $5 \times 9 =$ _____

d. $9 \times 4 =$ _____

g. $10 \times 7 =$ _____

b. $6 \times 3 =$ _____

e. $3 \times 5 =$ _____

h. $7 \times 6 =$ _____

c. $2 \times 8 =$ _____

f. $4 \times 2 =$ _____

i. $8 \times 9 =$ _____

Q5. Multiplication Sums.

a. $65 \times 6 =$ _____

b. $88 \times 5 =$ _____

Q6. Write the following in Expanded Form.

a. $963 -$ _____

b. $562 -$ _____

Q7. Write the ordinal numbers and ordinal number names for the following.

a. 16 - _____

b. 5 - _____

Q8. Divide.

a. $158 \div 3 =$ _____

b. $136 \div 2 =$ _____

Q9. Arrange these numbers in Ascending and Descending orders.

500, 369, 965, 489, 213, 1000

Ascending Order - _____

Descending Order - _____

Q10. Write the following in Compact Form.

a. $900 + 60 + 3 =$ _____

b. $500 + 30 + 7 =$ _____

Q11. Write the Place Value of the underlined numbers.

a. $6\underline{5}4$ - _____

b. $\underline{1}000$ - _____

Q12. Write the names of the following numbers.

a. 526 - _____

b. 963 - _____

c. 854 - _____

Q13. Write the next three odd numbers for the following. 89, 91, _____, _____, _____

Q14. The cost of a chair is Rs.405 and the cost of a table is Rs.509. Find the total cost of both the items.

Q15. There are 210 red apples and 398 green apples in a big basket. How many total apples are there?



THE ASIAN SCHOOL, DEHRADUN

(Session 2023-24)

HOLIDAY HOMEWORK WORKSHEET

Name-.....

Class: II

Subject: EVS

Note:

1. Attempt the worksheet given below.
2. The worksheet is based on the topics which have been taught previously.
3. The worksheet is meant for practice and recapitulation and shall be discussed by the subject teacher once the classes resume.


Q1. Label the pictures with the name of the places-

POLICE STATION GROCERY STORE FIRE STATION PARK RESTAURANT
MUSEUM SCHOOL MOVIE THEATER HOSPITAL SUPERMARKET TOY STORE




Q2. Paste two pictures of each of the following modes of transport.

Land Transport

A large, empty rectangular box with a black border, intended for pasting two pictures of land transport.

Air Transport

A large, empty rectangular box with a black border, intended for pasting two pictures of air transport.

Water Transport

| |
|--|
| |
|--|

Q3. Put the following given ways of communication under the separate headings:

WiFi, WhatsApp, book, letter, video calling, SMS, Landline phones, e-mail ,
Internet, computer

| VERBAL COMMUNICATION | NON-VERBAL COMMUNICATION |
|----------------------|--------------------------|
| | |
| | |
| | |
| | |
| | |
| | |

Q4. Good Habits and Safety Rules-

1. Fill in the blanks with the correct words.

- a. We _____ (should / should not) play with switches and wires.
- b. We _____ (should / should not) cross the road at a zebra crossing.
- c. We _____ (should / should not) play with knives.

2. Tick things that are safe to play with, and cross out unsafe ones.

☐☐☐☐☐

3. Match the following.

| | |
|----------------------|----------------------|
| a. Red light | 1. Wait |
| b. Green light | 2. Healthy and fit |
| c. Zebra crossing | 3. Stop |
| d. Rest and exercise | 4. to cross the road |





THE ASIAN SCHOOL, DEHRADUN

(Session 2023-24)

HOLIDAY HOMEWORK WORKSHEET

Name-.....

Class: II

Subject: IT

Note:

1. Attempt the worksheet given below.
2. The worksheet is based on the topics which have been taught previously.
3. The worksheet is meant for practice and recapitulation and shall be discussed by the subject teacher once the classes resume.

Q1. Write True or False.

- a. A computer is a man-made machine. _____
- b. A computer works in three steps that are called Process, Input and Output. _____
- c. MS Paint is a drawing application. _____
- d. The Start button is at the bottom of the screen. _____
- e. We can do many things by using a computer. _____

Q2. Name the following.

- a. The keys which are used to write alphabets on the computer. _____
- b. The longest key on the keyboard. _____
- c. The area on which we draw and colour in MS Paint. _____
- d. The part of a computer which shows the output. _____
- e. The brain of a computer. _____

Q3. Match the following.

- | | |
|----------------------------|--------------------------|
| a. Laptop | touchscreen |
| b. Tablet | touchpad |
| c. Desktop computer | storage device |
| d. CD | cannot be carried easily |
| e. Artificial Intelligence | humans |
| f. Natural Intelligence | machines |

Q4. Draw and write the names of the tools of MS Paint to do the following.

- a. To add text in the drawings - _____
- b. To draw different shapes - _____
- c. To fill color in the closed shapes - _____
- d. To erase the drawings - _____
- e. To draw free-hand drawings - _____

Q5. Name the different parts of computer used to do the following.

- a. To record voice on a computer - _____
- b. To print the work done - _____
- c. To point at the things on the screen - _____
- d. To do written work - _____
- e. To scan the pages - _____

Q6. Rearrange the jumbled words.

- a. HMANUS - _____
- b. MAHCINES - _____
- c. ARTFIICAIL - _____
- d. SEPAKRSE - _____
- e. HDAEPONHES - _____

Q7. Complete the names of the following parts of the computer and mention whether they are Input, Output, Storage or Processing devices.

- a. M ____ N I ____ O ____ _____
- b. ____ P ____ _____
- c. ____ O U S ____ _____
- d. K ____ Y ____ O A ____ D _____
- e. ____ E N ____ R I ____ _____

Q8. Extra Information Based Questions.

- a. A very big, costly and high capacity computer used in big organizations for a large amount of work.

- b. The year in which the first version of MS Paint programmed. _____
- c. The person who programmed the first version of MS Paint. _____
- d. The mouse which is connected to a computer without a wire. _____
- e. The most famous AI robot. _____



THE ASIAN SCHOOL, DEHRADUN

(Session 2023-24)

HOLIDAY HOMEWORK WORKSHEET

Name-.....

Class: II

Subject: IT

Note:

1. Attempt the worksheet given below.
2. The worksheet is based on the topics which have been taught previously.
3. The worksheet is meant for practice and recapitulation and shall be discussed by the subject teacher once the classes resume.

Q1. Answer these questions.

1. What is a computer?

2. Name any five places where computers are used.

3. What are Input devices?

4. Why is a pendrive called a portable storage device?

5. Write any five uses of computers.

Q2. Application Based Questions.

1. Myra wants to fill colours in the picture of a house which she has made on MS Paint. Which tool will she use?

2. Amit wants to take a small computer which he can easily carry to his office. Which computer will he buy?

3. Sunny wants to hear the music while working without disturbing anyone. Which device will he use?

4. Avni wants to write the backward counting on his computer. Which keys of the keyboard will she use?

5. Mohan, a farmer wants to guard his field all the time so that no one can harm his crops. Which AI gadget will he use?



THE ASIAN SCHOOL, DEHRADUN

(Session 2023-24)

HOLIDAY HOMEWORK WORKSHEET

Name-.....

Class: II

Subject: GK

Note:

1. Attempt the worksheet given below.
2. The worksheet is based on the topics which have been taught previously.
3. The worksheet is meant for practice and recapitulation and shall be discussed by the subject teacher once the classes resume.

Give one word answer -

Q1 Who is the CM of Uttarakhand ?

Ans 1. _____

Q2 What is the name of your class teacher?

Ans 2 _____

Q3 Who celebrates Christmas ?

Ans 3 _____

Q4 What is the capital of Uttarakhand ?

Ans 4 _____

Q5 Write any one festival of Uttarakhand ?

Ans 5 _____

Draw ,colour and name your favourite cartoon character