

## THE ASIAN SCHOOL



### PRACTICE WORKSHEET SUBJECT – ENGLISH CLASS : 3

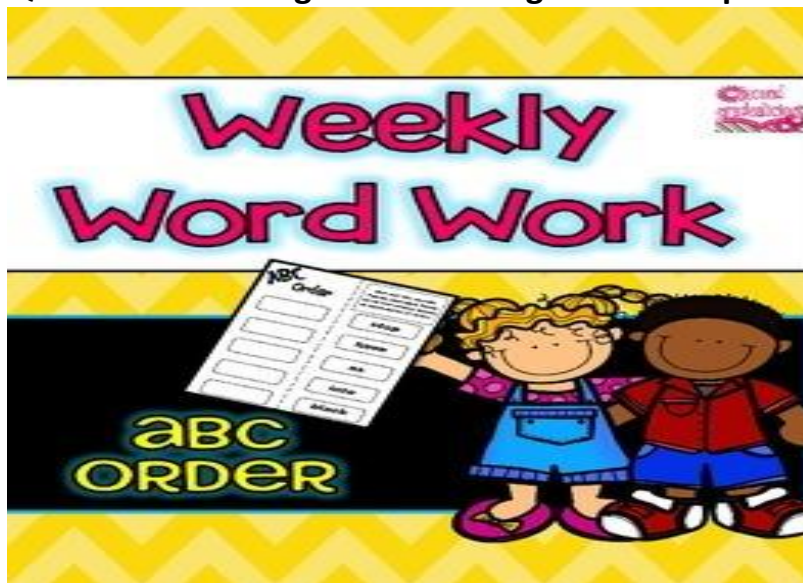
**Question 1 Read the passage below and answer the questions that follow :**



Dolphins are very clever animals. They look like fish, but they are mammals. This means they have to come up and breathe air. This is why they have a hole in their nose ! They are very fast swimmers, and can jump out of water. They eat small fish , and only big sharks and killer whales can eat them. They sometimes help people when they are in trouble in the water . Did you know they only sleep with half their brain at a time!

1. Are dolphins fish ?
2. What do dolphins eat ?
3. What two animals can eat a dolphin?
4. How do dolphins breathe ?
5. Give a suitable title to the passage.

**QUESTION 2** Arrange the following words in alphabetical order.



[This Photo](#) by Unknown Author is licensed under [CC BY-SA-NC](#)

1. spoon , cup , plate , bowl .
2. window , door , key , lock .
3. pear , plumb , papaya , pumpkin .
4. buffalo , bear , bird , bull.
5. Dress , dish , dream , dance .


**QUESTION 3** Rearrange and punctuate :



[This Photo](#) by Unknown Author is licensed under [CC BY-SA-NC](#)

1. writing / what / teacher / is / the
2. class / studies / in / he / my
3. won / the / hurray / we / game
4. banana / he / grapes / had / peach / and / for / breakfast
5. you / where / going / are

QUESTION 4 Choose the correct nouns from the options given below:



[This Photo](#) by Unknown Author is licensed under [CC BY-NC-ND](#)

( milk , car , Sunday , Dehradun , Taj Mahal , troupe , flock )

1. He bought a new \_\_\_\_\_.
2. We should drink \_\_\_\_\_ everyday.
3. \_\_\_\_\_ is a clean city.
4. Raj will go to Delhi on \_\_\_\_\_.
5. The \_\_\_\_\_ is in Agra .
6. The \_\_\_\_\_ of birds are flying in the sky .
7. The \_\_\_\_\_ of dancers danced gracefully.



**QUESTION 5 Underline the verbs in the following sentences :**



[This Photo](#) by Unknown Author is licensed under [CC BY-NC](#)

1. Suman reads short stories.
2. We are building a house .
3. You write neatly in your notebook.
4. We go for swimming on Sunday .
5. My dad buys a newspaper every morning.

**साहित्य भाग**

1. घर की सफाई करने के लिए इस्तेमाल होने वाली किन्हीं चार वस्तुओं के चित्र बनाएं या चिपकाएं, उनके नाम लिखें और उपयोग बताएं - ( यह कार्य **साहित्य भाग** कॉपी में करें। )

**भाषा भाग** – ( यह कार्य **भाषा भाग** कॉपी में करें। )

1. दिए गए चित्रों की सहायता से सार्थक वाक्य बनाएं -



1. टिमटिमा/रहे/तारे/हैं \_\_\_\_\_



2. खा/केला/ राम/है/रहा \_\_\_\_\_



3. चुग/मुर्गी/दाना/है/रही \_\_\_\_\_



4. गेंद/से/खेल/रहे/बच्चे/हैं \_\_\_\_\_

2. दिए गए चित्रों के दो-दो पर्यायवाची शब्द लिखिए –

1.



2. shutterstock.com - 17220007524



3.



4.



5.



3. दिए गए अपठित गद्यांश को पढ़ें और निम्नलिखित प्रश्नों के उत्तर दें –

गद्यांश का हल काजिए—

गांधी जी देशभर में जगह-जगह जाते, लोगों से आजादी के संघर्ष की बात करते और चन्दा इकट्ठा करते। फिर उस धन को उस क्षेत्र के लोगों की भलाई के लिए दे दिया करते थे। एक गरीब महिला ने अपनी बच्ची की कलाई पर पहना चाँदी का पतला-सा हलका, नाममात्र का कड़ा गांधी जी को दिया तो उनका हृदय द्रवित हो उठा। उन्होंने कहा, “यह छोटा-सा कड़ा मेरे लिए लाखों रुपये के हीरे के आभूषणों से बड़ा है।”

यह छोटा-सा कड़ा मेरे लिए लाखों रुपये के हीरे के आभूषणों से बड़ा है।

1. गाँधी जी जगह - जगह जाकर किसके बारे में बात करते थे ?

2. महिला ने किसकी कलाई से कड़ा उतार दिया था ?

3. गद्यांश के उचित शीर्षक लिखिए ?

4.. गद्यांश में मैं से कोई दो संज्ञा शब्द छाँटकर लिखें-

5. दिए गए शब्दों के लिंग बदलें -

(क) पुरुष

(ख) बच्चा

THE ASIAN SCHOOL

PRACTICE WORKSHEET

SUBJECT- MATH

CLASS: 3

MENTAL MATH

1) Symbol of addition is \_\_\_\_\_.

2) Symbol of subtraction is \_\_\_\_\_.

3) Greatest 4-digit number is \_\_\_\_\_.

4) Greatest 5-digit number is \_\_\_\_\_.

5) Smallest 4-digit number is \_\_\_\_\_.

6) Expanded form of:

1. 4823= \_\_\_\_\_

2. 9264= \_\_\_\_\_

7) Compact form of:

1. 7000+300+40+60 = \_\_\_\_\_.

2. 9000+200+20+2 = \_\_\_\_\_.

8) Write predecessor of:

1. \_\_\_\_\_ 7000

2. \_\_\_\_\_ 4220

3. \_\_\_\_\_ 4073

4. \_\_\_\_\_ 2380

9) Write successor of:

1. 4799 \_\_\_\_\_

2. 3009 \_\_\_\_\_

3. 9879 \_\_\_\_\_

4. 4701 \_\_\_\_\_

10) Encircle the smallest number:

1. 4031, 4301, 5231, 5201

2. 8527, 8521, 8524, 8525

11) 50 more than 450 = \_\_\_\_\_

12) 100 less than 600 = \_\_\_\_\_

13) Write the place value of 6 in

7680 - \_\_\_\_\_

6342 - \_\_\_\_\_

1561 - \_\_\_\_\_

1896 - \_\_\_\_\_

14) Dodging:

7 X 6 = \_\_\_\_\_

8 X 5 = \_\_\_\_\_

9 X 9 = \_\_\_\_\_

9 X 7 = \_\_\_\_\_

11 X 10 = \_\_\_\_\_

8 X 3 = \_\_\_\_\_

6 X 5 = \_\_\_\_\_

3 X 9 = \_\_\_\_\_

4 X 8 = \_\_\_\_\_

5 X 5 = \_\_\_\_\_

3 X 7 = \_\_\_\_\_

1 X 0 = \_\_\_\_\_

2 X 6 = \_\_\_\_\_

0 X 0 = \_\_\_\_\_

$6 \times 8 = \underline{\hspace{2cm}}$

ADD/ SUBTRACT:

$$\begin{array}{r} 76 \\ +21 \\ \hline \end{array}$$

$$\begin{array}{r} 58 \\ +31 \\ \hline \end{array}$$

$$\begin{array}{r} 984 \\ +104 \\ \hline \end{array}$$

$$\begin{array}{r} 843 \\ +253 \\ \hline \end{array}$$

$$\begin{array}{r} 947 \\ +127 \\ \hline \end{array}$$

$$\begin{array}{r} 35 \\ -23 \\ \hline \end{array}$$

$$\begin{array}{r} 87 \\ -45 \\ \hline \end{array}$$

$$\begin{array}{r} 649 \\ -335 \\ \hline \end{array}$$

$$\begin{array}{r} 862 \\ -335 \\ \hline \end{array}$$

$$\begin{array}{r} 744 \\ -237 \\ \hline \end{array}$$



**THE ASIAN SCHOOL**  
**PRACTICE WORKSHEET**  
**SUBJECT- E.V.S.-II**  
**CLASS: 3**

**Question 1: Given below is the map of the world.**



**On the basis of the above information identify the continents given below**



---



---



---



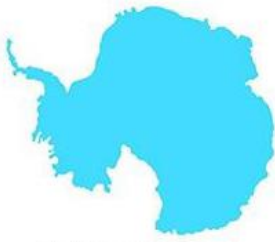
---



---



---



---

Sign and Symbol that we use in our every day life.

Question 2: On a A4 size sheet draw the following symbols



People who help us/Society Helpers make our life meaningful comfortable and safe

Question 3: Match the following

© www.kids-pages.com

## Jobs Matching

Match the images on the left to their corresponding images on the right.







THE ASIAN SCHOOL

PRACTICE WORKSHEET

SUBJECT: EVS 1

CLASS: 3

Read the text book lessons:

A) Foods we eat

B) Flying high

Q .1 In the table given below, write the names of the food items, that you have eaten in a day.

Breakfast	Lunch	Dinner

Now arrange the food items that you have eaten in the following columns.

Healthy food	Unhealthy food

Q2. Write the names of any 3 food items that you have never eaten before but you feel like eating.

Ans- \_\_\_\_\_

Q3. Complete the picture exercise related to birds given on page no. 52 and 53. Do these in the text book.

Q4. Think and answer-

“IF I WERE A BIRD”

1) I would like to be ( name of bird ) \_\_\_\_\_ because

\_\_\_\_\_

2) I would like to fly to (name of the place) \_\_\_\_\_ because

\_\_\_\_\_

**ACTIVITY**

Make a bird feeder using waste material available at home.

