

THE ASIAN SCHOOL, DEHRADUN, UTTARAKHAND
HOLIDAY HOMEWORK WORKSHEET
CLASS - 1
SUBJECT - ENGLISH

Q1: Identify the pictures and rearrange the consonant letters to make a meaningful word:

a) m a p l _____



b) b a t l e _____



c) k u c d _____



d) f e a l _____



e) l f o r e w _____



Q2: Write the names of any six people. Three names should begin with a vowel and three should begin with a consonant :

a) _____ b) _____ c) _____

d) _____ e) _____ d) _____

Q3: Arrange the given letters in alphabetical orders:

a) d a b c

b) p m n o

c) y w z x

d) r s q t

Q4: Write the opposites of the following.

- a) Big _____
- b) Light _____
- c) Cold _____
- d) Night _____
- e) Young _____
- f) Long _____
- g) Beautiful _____
- h) Fast _____

Q5: Match the pictures with their names :

1. Cow
2. Book
3. Bell
4. Cup
5. Dog
6. Pen



Q6: Picture comprehension.

<

In the vegetable garden

...

Answer the questions with complete sentences

1. Where are the people?
2. What is the weather like?
3. How many people are in the picture?
4. What does the boy harvest?
5. What other vegetables can you find here?
6. What clothes does the woman wear?
7. What color do the houses have?
8. What does the girl do?
9. Which animals are there in the garden?
10. Which season is it?

The Asian School
Practice Worksheet
Subject Hindi
Class-1

प्र1. चित्र पहचान कर शब्द लिखें -



क)



ख)



ग)



घ)



ङ)

प्र 2. ओ, औ की मात्रा लगाकर शब्द पूरा करें -



क) - त_लिया



ख) - ल_की



ग) - ढ_लक



घ) - म_र



ङ) - न_का



च) - ट_पी

प्र 3. चित्र देखकर दस शब्द लिखें -



THE ASIAN SCHOOL, DEHRADUN, UTTARAKHAND
HOLIDAY HOMEWORK WORKSHEET (2022-2023)

CLASS: 1 SUBJECT: MATHEMATICS

Q1. Write the number names.

TO

- a. 50 - _____
- b. 40 - _____
- c. 30 - _____
- d. 20 - _____
- e. 10 - _____

Q2. Write the numbers for these number names.

TO

- a. Forty four - _____
- b. Thirty six - _____
- c. Twenty five - _____
- d. Thirteen - _____
- e. Nineteen - _____

Q3. Fill in the missing numbers.

- a. 36 _____ 39 _____
- b. 42 _____ 45 _____
- c. 18 _____ 14
- d. 29 _____ 25

Q4. Put the signs (<, >, =) to compare the numbers.

- a. 15 _____ 15 c. 44 _____ 32
- b. 36 _____ 45 d. 18 _____ 19

Q5. What comes after the given numbers?

- a. 36 _____ c. 18 _____

b. 7 _____ d. 49 _____

Q6. What comes between the given numbers?

a. 38 _____ 40 c. 46 _____ 48

b. 19 _____ 21 d. 25 _____ 27

Q7. What comes before the given numbers?

a. _____ 44 c. _____ 36

b. _____ 11 d. _____ 40

****Learn the given Table of 2 and fill in the blanks.**

$2 \times 1 = 2$ Two ones are 2

$2 \times 2 = 4$ Two twos are 4

$2 \times 3 = 6$ Two threes are 6

$2 \times 4 = 8$ Two fours are 8

$2 \times 5 = 10$ Two fives are 10

$2 \times 6 = 12$ Two sixes are 12

$2 \times 7 = 14$ Two sevens are 14

$2 \times 8 = 16$ Two eights are 16

$2 \times 9 = 18$ Two nines are 18

$2 \times 10 = 20$ Two tens are 20

Fill in the blanks.

a. $2 \times 5 =$ _____ c. $2 \times 1 =$ _____

b. $2 \times 9 =$ _____ d. $2 \times 4 =$ _____

Q9. Write the counting 51 to 100.

TO	TO	TO	TO	HTO

Q10. Write the backward counting 100 to 51.

[illegible]





THE ASIAN SCHOOL, DEHRADUN, UTTARAKHAND

HOLIDAYS HOMEWORK WORKSHEET

SUBJECT: EVS.

CLASS: I


Q1: Match the following.


COLUMN A	COLUMN B
1. Milk	
2. Egg	
3. Bread	
4. Fish	


Q2: Tick (✓) for correct and (✗) for wrong.

1. We should eat fruits. ()
2. We should eat noodles daily. ()
3. We should drink milk everyday. ()
4. We should eat pizza everyday. ()

Q3: Write 'V' for vegetables and 'F' for fruits.

1. 

2. 

3. 

4.



5.



6.



Q4: Make happy face 😊 for healthy food and sad face ☹️ unhealthy food.

1.



()

2.



()

3.



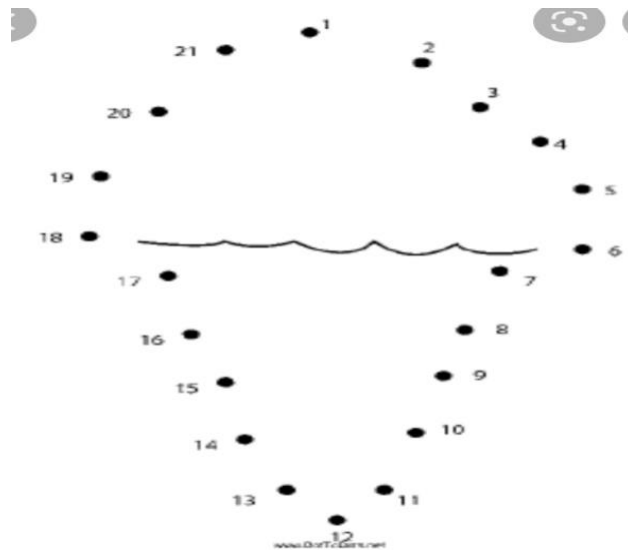
()

4.



()

Q5: Join the dots, complete the picture and colour it.







THE ASIAN SCHOOL, DEHRADUN, UTTARAKHAND

HOLIDAYS HOMEWORK WORKSHEET

SUBJECT: IT.

CLASS: I

Q1: Match the following.

COLUMN A	COLUMN B
1. Mobile phone	
2. Fan	
3. Washing machine	
4. Laptop	

Q2: Tick (✓) for correct and (✗) for wrong statements.

1. A washing machine is used to wash clothes. ()
2. A desktop computer is very light in weight. ()
3. A mobile phone is used to make calls. ()
4. A computer is used in office. ()

Q3: Write 'M' for machines given below and 'N' for other items.

1.



2.



3.



4.



5.



6.



Q4: Fill in the blanks with the help of helpbox.

Refrigerator,	Camera,	Air conditioner,	Machine
---------------	---------	------------------	---------

1. A _____ is used to click photographs.

2. A _____ keeps the food and drinks cool.

3. A computer is a _____.

4. A _____ keeps the room cool.

Q5: Write the names of two machines that need electricity to work.

1. _____

2. _____

Q6: Draw any type of a computer, colour it and write its name.